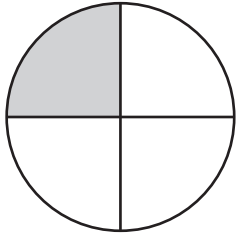


Name: _____

Fractions, Decimals, and Percents

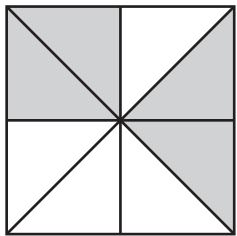


Tell what part of the circle is shaded.

_____ fraction

_____ decimal

_____ percent




Tell what part of the square is shaded.

_____ fraction

_____ decimal

_____ percent

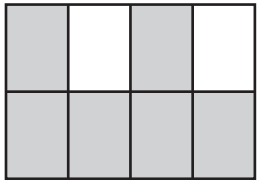


Tell what part of the star is shaded.

_____ fraction

_____ decimal

_____ percent

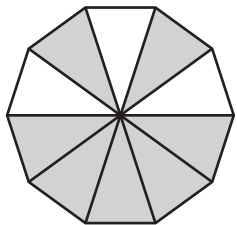


Tell what part of the rectangle is shaded.

_____ fraction

_____ decimal

_____ percent



Tell what part of the polygon is shaded.

_____ fraction

_____ decimal

_____ percent